

6.3 Optimization

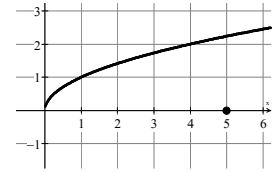
Name: _____

Write your questions
and thoughts here!**Example #1**

Find two numbers whose sum is 30 and whose product is as large as possible.

Example #2

What point on the graph $y = \sqrt{x}$ is closest to $(5,0)$.

**Notes****Example #3**

Mr. Kelly needs to make an open-top box to store all his Magic cards. He has a piece of cardboard that is 14 by 30 inches. To do this, Mr. Kelly cuts out squares of equal size from the four corners so the four sides can be bent upwards. What size should the squares be in order to create a box with the largest possible volume?

Example #4

Two towers are 30 feet apart. One is 12 feet high and the other is 28 feet high. There is a stake in the ground between the towers. The top of each tower has a wire tied to it that connects to the stake on the ground. Where should the stake be placed to use the least amount of wire?

Strategies for solving optimization problems:

1. Draw a picture (if applicable) and identify *known* and *unknown* quantities.
2. Write an equation (model) that will be optimized.
3. Write your equation in terms of a single variable.
4. Determine the desired max or min value with calculus techniques.
5. Determine the domain (endpoints) of your equation to verify if the endpoints represent a max or min.

6.3 Optimization

Calculus

Name: _____

Practice

- | | |
|---|--|
| <ol style="list-style-type: none">1. What is the smallest product of two numbers given that one number is exactly 7 greater than the other number? | <ol style="list-style-type: none">2. If the product of two positive numbers is 36, and the sum of the first number plus 4 times the second number is a minimum, what are the two numbers? |
| <ol style="list-style-type: none">3. A manufacturer wants to design an open box having a square base and a surface area of 108 square inches. What dimensions will produce a box with maximum volume? | <ol style="list-style-type: none">4. Sullivan and Brust are watching fireworks on the 4th of July. They build towers to get a better view, and decide to work together by securing them to the same stake in the ground. They place the towers 40 feet apart. Mr. Brust's tower is 10 feet high and Mr. Sullivan's tower is 22 feet high. Where should the stake be placed to use the least amount of wire? |

5. Which points on the graph of $y = 4 - x^2$ are closest to the point $(0, 2)$?

6. A rectangular page is to contain 24 square inches of print. The margins at the top and bottom of the page are to be 1.5 inches, and the margins on the left and right are to be 1 inch. What should the dimensions of the page be so that the least amount of paper is used?

7. You are creating an open-top box with a piece of cardboard that is 16 X 30 inches. What size of square should be cut out of each corner to create a box with the largest volume?

8. A rectangular pig pen using 300 feet of fencing is built next to an existing wall, so only three sides of fencing are needed. What dimensions should the farmer use to construct the pen with the largest possible area?

9. Which points on the graph of $y = 3 - x^2$ are closest to the point $(0, 1)$?

10. Engineers are designing a box-shaped aquarium with a square bottom and an open top. The aquarium must hold 864 cubic feet of water. What dimensions should they use to create an acceptable aquarium with the least amount of glass?

11. What is the radius of a cylindrical soda can with volume of 512 cubic inches that will use the minimum material? Volume of a cylinder is $V = \pi r^2 h$. Surface area of a cylinder is $A = 2\pi r^2 + 2\pi r h$

For 12-13, find the largest possible area of each object, given its boundaries. Draw a picture to represent each problem. Give the DIMENSIONS of the object as your final answer.

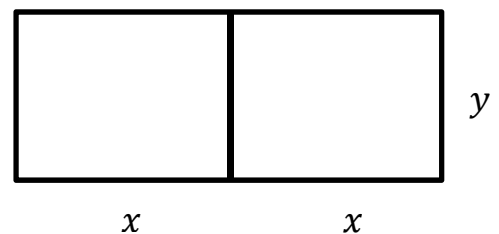
12. A rectangle is formed in Quadrant I with one corner at the origin and the other corner on the line $y = 8 - 2x$

13. A rectangle is formed with the base on the x -axis and the top corners on the function $y = 6 - x^2$

14. A power station is on one side of a river that is $\frac{1}{2}$ mile wide, and a factory is 6 miles downstream on the other side. It costs \$60,000 per mile to run power lines over land and \$85,000 per mile to run them underwater. Find the most economical path for the transmission line from the power station to the factory. *Hint:* Total Cost = (on land cost)(distance on land) + (underwater cost)(distance in water)

15. A swimmer is 500 meters from the closest point on a straight shoreline. She needs to reach her house located 2000 meters down shore from the closest point. If she swims at $\frac{1}{2}$ m/s and she runs at 4 m/s, how far from her house should she come ashore so as to arrive at her house in the shortest time? *Hint:* $\text{time} = \frac{\text{distance}}{\text{rate}}$

16. A rancher has 200 feet of fencing with which to enclose two adjacent rectangular corrals (see figure). What dimensions should be used so that the enclosed area will be a maximum?



6.3 Optimization

1. If $f(x) = 3x^2 + 1$, then $\lim_{x \rightarrow 0} \frac{f(x) - f(0)}{x^2}$ is

- (A) 0 (B) 1 (C) 2
 (D) 3 (E) nonexistent

2. A gun is fired vertically upward from a position 100 feet above ground at an initial velocity of 400 feet per second. Determine the maximum height of the projectile. The acceleration of gravity is -32 ft/sec. Recall the height can be modeled by $h(t) = \frac{1}{2}gt^2 + v_0t + h_0$.

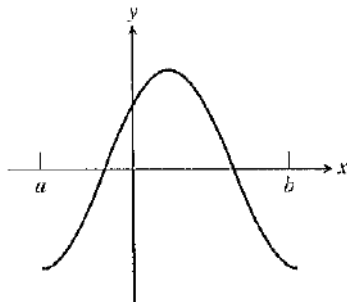


- (A) 3,000 feet (B) 2,600 feet (C) 2,200 feet
 (D) 1,800 feet (E) 1,400 feet

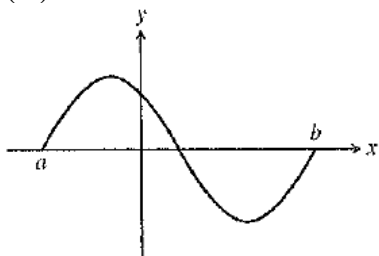
3. If $f(x) = \frac{e^{(3x)}}{3x}$, then $f'(x) =$

- (A) $\frac{e^{(3x)}(3x-1)}{3x^2}$ (B) $\frac{e^{(3x)}(1-3x)}{3x^2}$ (C) $e^{(3x)}$ (D) $\frac{e^{(3x)}(3x+1)}{x^2}$ (E) 1

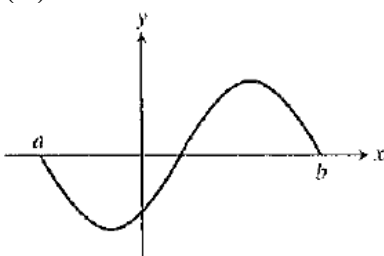
4. The graph of f is shown below. Which of the following could be the graph of the derivative of f ?



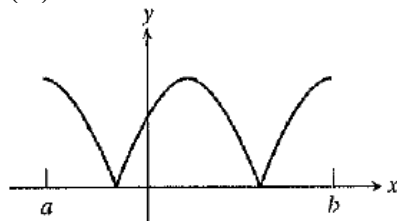
(A)



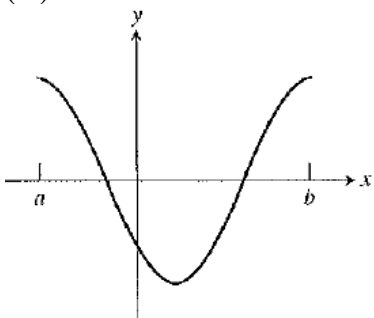
(B)



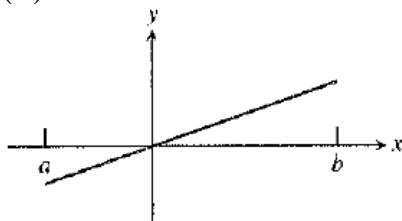
(C)



(D)



(E)



5. An equation of the line tangent to the graph of $y = \cos 3x$ at $x = \frac{\pi}{6}$ is

(A) $y = 3\left(x - \frac{\pi}{6}\right)$

(B) $y = -\left(x - \frac{\pi}{6}\right)$

(C) $y = -3\left(x - \frac{\pi}{6}\right)$

(D) $y - 1 = -\left(x - \frac{\pi}{6}\right)$

(E) $y - 1 = -2\left(x - \frac{\pi}{6}\right)$