

6.6 Properties of Definite Integrals

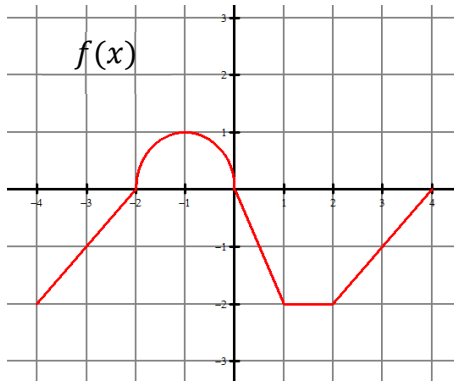
CA #1

Calculus

Name: _____

The graph of f consists of line segments and a semicircle. Evaluate each definite integral.

1.



a. $\int_{-4}^{-2} f(x) dx =$

d. $\int_{-4}^4 f(x) dx =$

b. $\int_{-2}^0 4f(x) dx =$

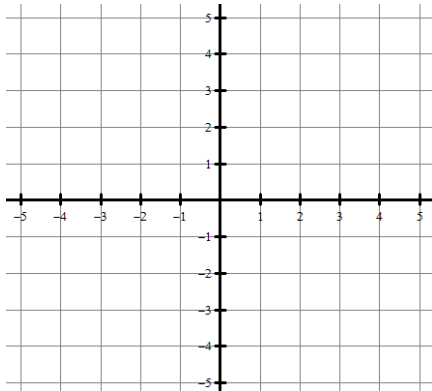
e. $\int_4^2 f(x) dx =$

c. $\int_4^0 f(x) dx =$

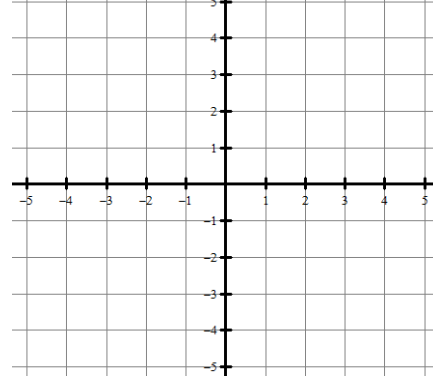
f. $\int_{-1}^1 f(x) dx =$

Sketch a graph of the definite integral. Evaluate the integral with a graphing calculator.

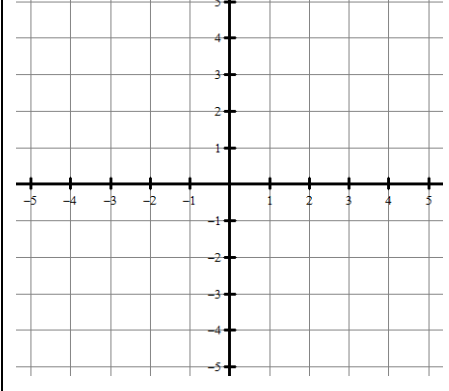
2. $\int_{-1}^0 (x^3 - 1) dx =$



3. $\int_{-1}^2 (5 - x^2) dx =$



4. $\int_{-2}^3 -|x + 1| dx =$



Let f be a continuous functions that produces the following definite integral values.

$$\int_{-4}^6 f(x) dx = 2 \text{ and } \int_6^8 f(x) dx = -5$$

Find the following.

5. $\int_{-4}^6 5f(x) dx =$

6. $\int_{-4}^8 f(x) dx =$

7. $\int_8^6 f(x) dx =$

Let f be a continuous functions that produces the following definite integral values.

$$\int_0^3 f(x) dx = -4 \text{ and } \int_3^7 f(x) dx = 2$$

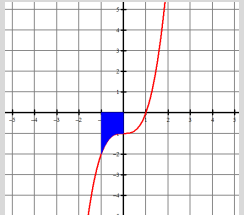
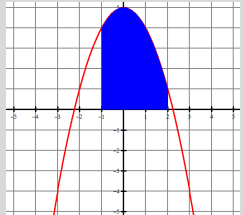
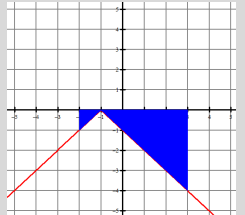
Find the following.

8. $\int_3^0 f(x) dx =$

9. $\int_3^3 f(x) dx =$

10. $\int_3^7 6f(x) dx =$

Answers to 6.6 CA #1

| | | | | |
|-------------------------------------------------------------------------------------------------|-------------------------------------------------------------------------------------------------|----------------------------------------------------------------------------------------------|-------------------------------------------------------------------------------------------------|---------|
| 1. a. -2 b. 2π c. 5 d. $\frac{\pi}{2} - 7$ e. 2 f. $\frac{\pi}{4} - 1$ | 2. -1.25  | 3. 12  | 4. -8.5  | 5. 10 |
| | 6. -3 | | | |
| | 7. 5 | | | |
| | 8. 4 | | | |
| | 9. 0 | | | |
| 10. 12 | | | | |