

6.6 Properties of Definite Integrals

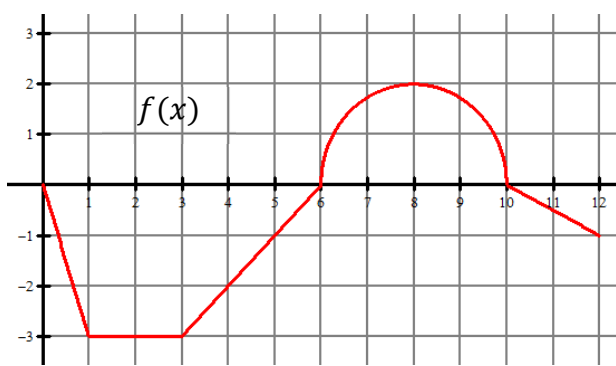
Calculus

Name: _____

CA #2

The graph of f consists of line segments and a semicircle. Evaluate each definite integral.

1.



a. $\int_0^6 2f(x) dx =$

d. $\int_0^{12} f(x) dx =$

b. $\int_{10}^{12} f(x) dx =$

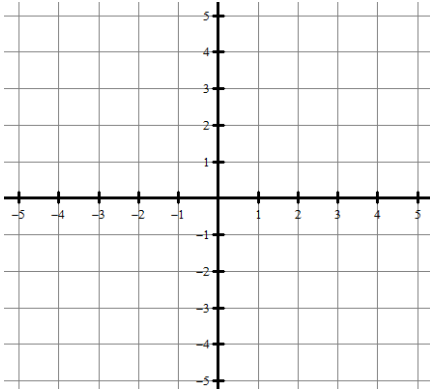
e. $\int_8^8 f(x) dx =$

c. $\int_{10}^6 f(x) dx =$

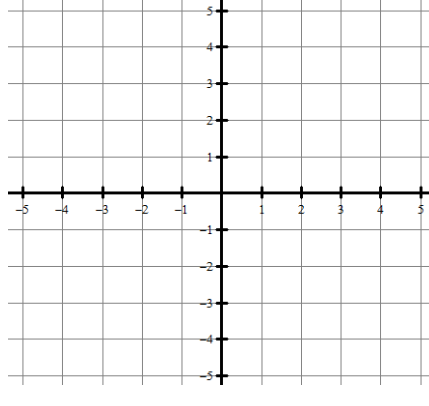
f. $\int_3^5 3f(x) dx =$

Sketch a graph of the definite integral. Evaluate the integral with a graphing calculator.

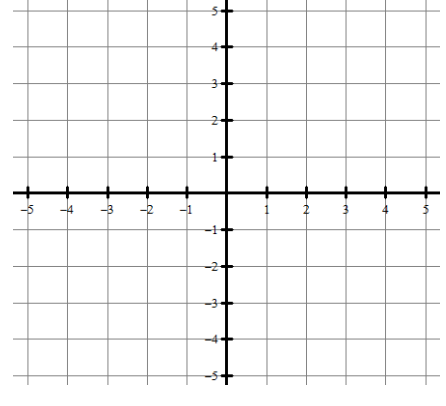
2. $\int_{-1}^3 \left(\frac{x}{3} - 2\right) dx =$



3. $\int_0^2 (x^2 - 1) dx =$



4. $\int_{-1}^4 \sqrt{x+3} dx =$



Let f be a continuous functions that produces the following definite integral values.

$$\int_{-2}^1 f(x) dx = 5 \text{ and } \int_{-2}^5 f(x) dx = 8$$

Find the following.

5. $\int_1^{-2} f(x) dx =$

6. $\int_{-2}^1 [-f(x)] dx =$

7. $\int_1^5 f(x) dx =$

Let f be a continuous functions that produces the following definite integral values.

$$\int_{-6}^{-2} f(x) dx = -3 \text{ and } \int_{-6}^4 f(x) dx = 2$$

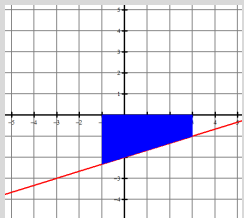
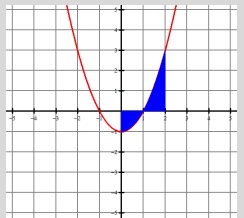
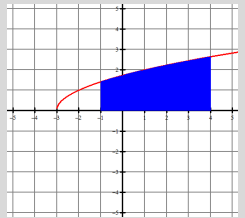
Find the following.

8. $\int_{-2}^4 f(x) dx =$

9. $\int_{-2}^{-6} f(x) dx =$

10. $\int_{-6}^4 5f(x) dx =$

Answers to 6.6 CA #2

<p>1. a. -24 b. -1 c. -2π d. $2\pi - 13$ e. 0 f. -12</p>	<p>2. $-6.\bar{6}$</p> 	<p>3. $0.\bar{6}$</p> 	<p>4. 10.461</p> 	<p>5. -5 6. -5 7. 3 8. 5 9. 3 10. 10</p>
---	---	--	--	---